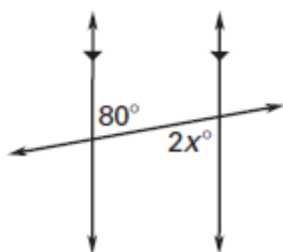


TARGET 3D

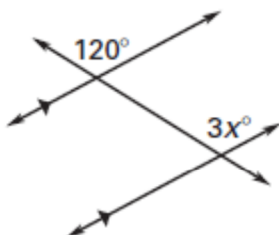
Name _____ Date _____

Find the value of x .

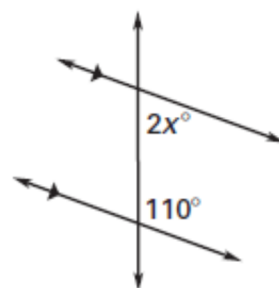
1.



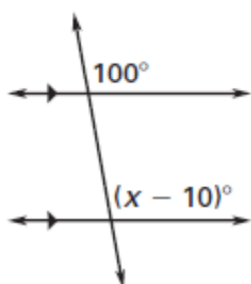
2.



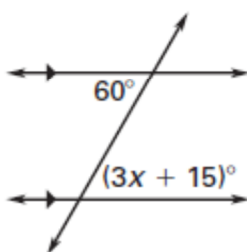
3.



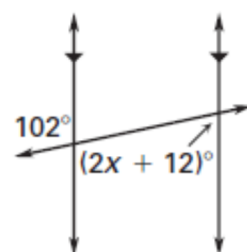
4.



5.

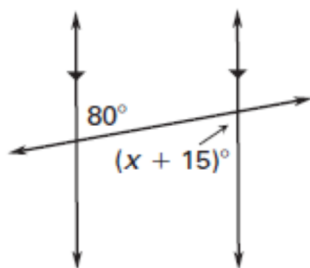


6.

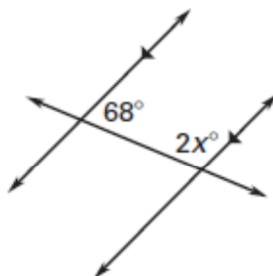


Find the value of x .

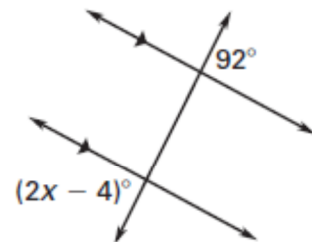
7.



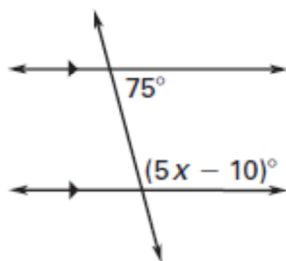
8.



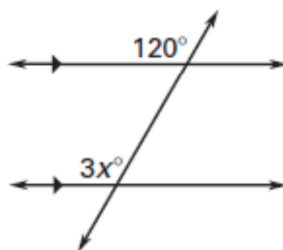
9.



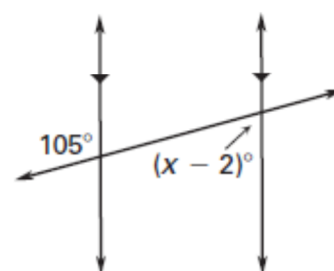
10.



11.



12.



TARGET 3D ANSWERS

1. 40
2. 40
3. 35
4. 110
5. 15
6. 33
7. 65
8. 56
9. 48
10. 23
11. 40
12. 77